

INDIAN SCHOOL AL WADI AL KABIR

DEPARTMENT OF EVS (2021 – 2022)


TOPIC: TIME AND DIRECTION

WORKSHEET – 1

RESOURCE PERSON: MRS.RUPALI B.

NAME: _____ CLASS: II SEC: _____ DATE: _____

I. Write the numbers in the given clock face.



II. Match the following.

A

B

- i. Number of days in a week
- ii. Number of hours in a day
- iii. Sixth month of the year
- iv. The day before today
- v. Number of months in a year

- a. yesterday
- b. 24
- c. 12
- d. June
- e. 7

i. _____ ii. _____ iii. _____ iv. _____ v. _____

III. Fill in the blanks.


Yesterday	Today	Tomorrow
	Wednesday	
	Friday	
	Monday	

IV. Write the months of the year in the correct order using the help box.

August	April	October	January
May	September	December	March
February	July	November	June

1. _____ 2. _____ 3. _____
4. _____ 5. _____ 6. _____
7. _____ 8. _____ 9. _____
10. _____ 11. _____ 12. _____

V. Look at the picture and fill in the blanks using words from the help box.



- | |
|-------|
| left |
| far |
| above |
| right |
| below |
| near |

1. The sofa is _____ the lamp.
2. Neha is cleaning the television with her _____ hand. So Raj is watering the plant on her _____.
3. Rina is _____ from Neha on her left but Ravi is _____ Neha.
4. The photo frames are _____ the chairs.



INDIAN SCHOOL AL WADI AL KABIR

DEPARTMENT OF EVS (2021 – 2022)

TOPIC: TIME AND DIRECTION

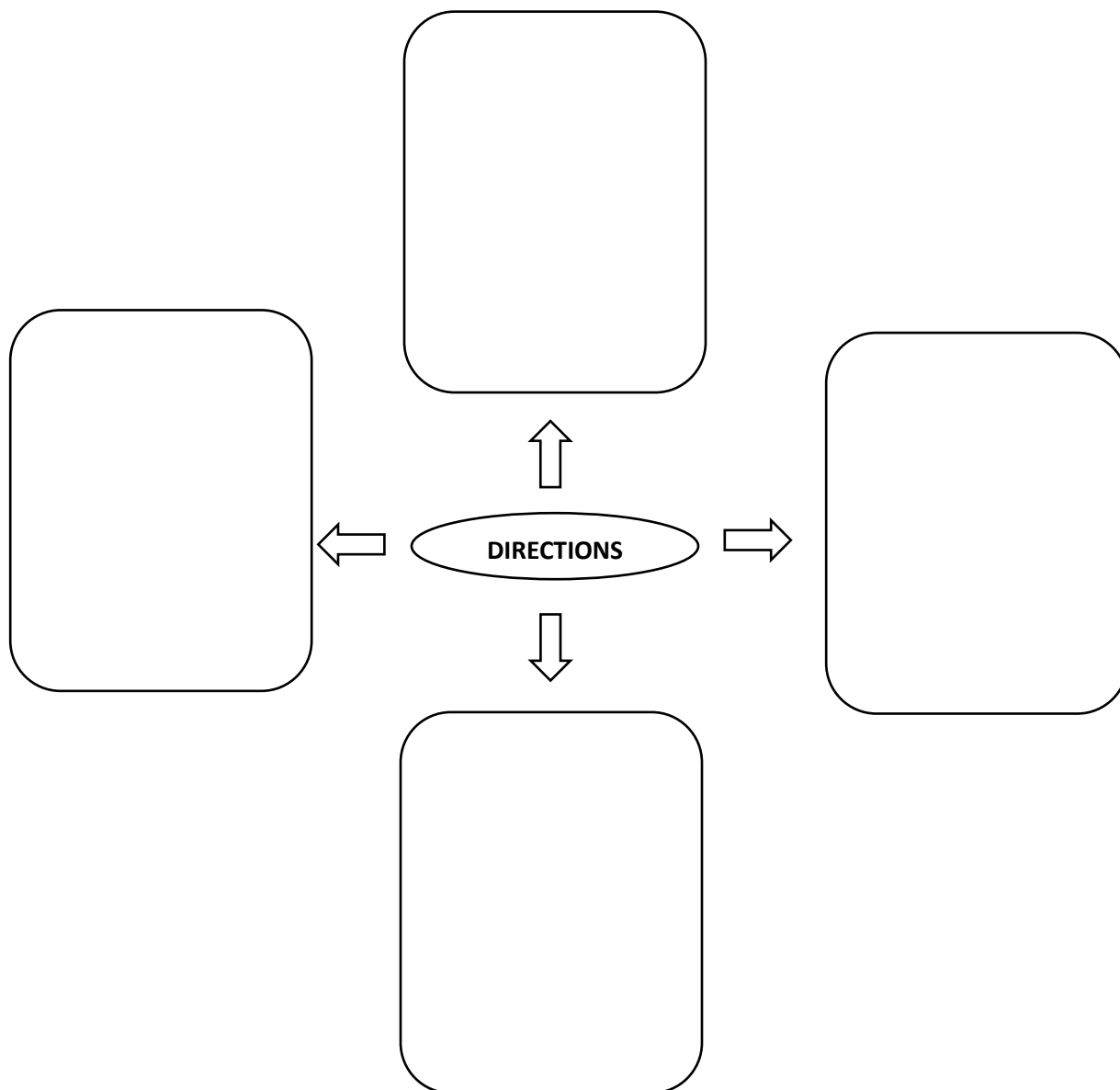
WORKSHEET – 2

RESOURCE PERSON: MRS.RUPALI B.

NAME: _____ CLASS: II SEC: ____ DATE: _____

I. Draw the pictures according to the instructions given below.

- a. balloon to the west
- b. kite to the east
- c. house to the north
- d. flower to the south



II. Here is a treasure map. Follow the instructions and use the key to help you find the places. Remember that the key is like a door key. It unlocks the map meaning.



1. Circle and write the thing north of the swamp on the map.

2. What is south of the Dead Tree? _____

- a. rocky hills b. danger (snakes) c. cave

3. Which one of these is a danger? _____

- a. wild dogs b. ship c. rocky hills

4. The treasure is marked by what symbol? _____

- a. ring b. box c. crown

5. What is to the west of wild dogs? _____

- a. swamp b. dead tree c. mine



INDIAN SCHOOL AL WADI AL KABIR

DEPARTMENT OF EVS (2021 – 2022)

TOPIC: TIME AND DIRECTION

CHAPTER CHECK UP WORKSHEET

RESOURCE PERSON: MRS.RUPALI B.

NAME: _____ CLASS: II SEC: ____ DATE: _____

I. State whether the following statements are 'true' or 'false'.

1. All the months of the year have 31 days. _____
2. Whatever is at a higher level than you, is below you. _____
3. A day is divided into 24 hours. _____
4. The needle of a compass always points to the north. _____
5. Monday is the month of a year. _____

II. Identify and name the picture given below. Write one use of it.



III. Fill in the blanks.

1. Once in 4 years, the year has _____ days.
2. From midnight, all through the day to the next midnight is _____.
3. Any object or place that is close to you or a very short distance from you, is _____ you.
4. The direction where the sun sets is the _____.
5. From 12 o'clock at night to 12 o'clock in the day is _____ a day.

IV. Answer the following questions.

1. What are the four cardinal directions?

Ans. _____

2. When does today become tomorrow?

Ans. _____

3. How does the compass help us find directions in the dark?

Ans. _____

V. Test your intelligence.

Complete this saying with suitable words. Also colour them.

_____ OR WEST

INDIA IS THE _____.